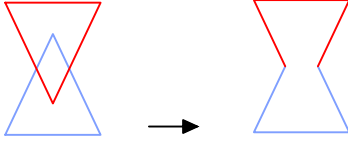




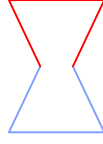
Ad : \_\_\_\_\_  
Soyad : \_\_\_\_\_  
Sınıf: \_\_\_\_\_ No: \_\_\_\_\_

## Test-14

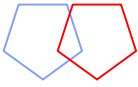
13.



1. Şekil



2. Şekil

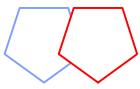


3. Şekil

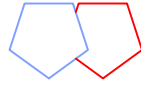
1. şekil ve 2. şekil arasında bir ilişki bulunmaktadır.

**Benzer ilişki 3. şekil ile hangisi arasında vardır**

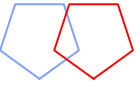
A)



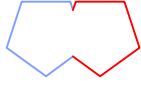
B)



C)



D)



14.



(1)



(2)




(3)



(4)



(5)

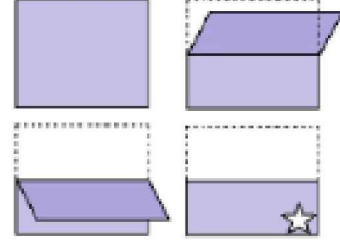


(6)

**Yukarıda numaralanmış şekiller ortak özelliklerine göre gruplandırılırsa doğru eşleşme hangileri olur?**

- A) 1,6 - 2,5 - 3,4  
B) 1,6 - 3,5 - 2,4  
C) 3,5 - 1,4 - 2,6  
D) 1,5 - 2,6 - 3,4

15.



Kağıt yukarıdaki şekildeki gibi katlanıp bir delik çalıyor.

**Kağıt geri açıldığında oluşan yeni şekil aşağıdakilerden hangisi olur?**

A)



B)



C)

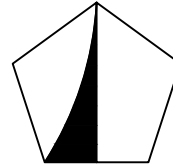


D)

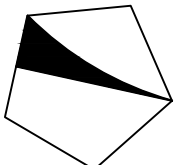


**16. Bir şeklin etrafında döndürülerek oluşturulan aşağıdaki şekillerden hangisi diğerlerinden farklıdır ?**

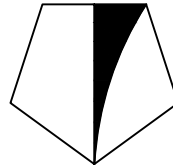
A)



B)



C)



D)

