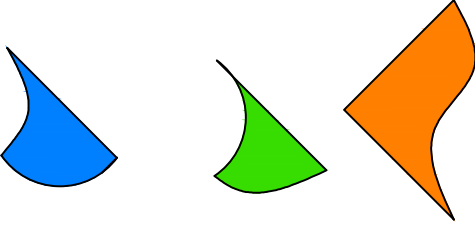




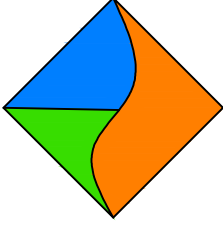
## Test-13

12.

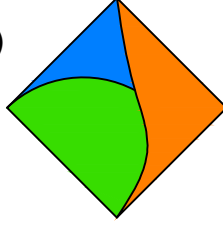


Yukarıda verilen parçalar ile aşağıdaki şekillerden hangisi oluşturulabilir ?

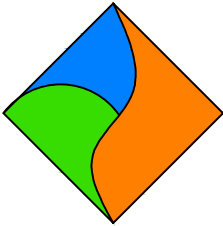
A)



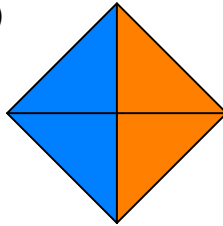
B)



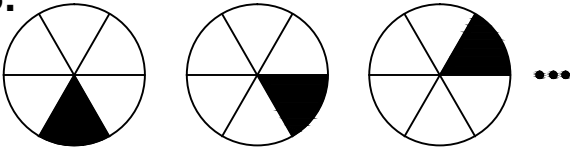
C)



D)



13.



1. Şekil

2. Şekil

3. Şekil

Yukarıda verilen şekil dizisi belli bir kurala göre sıralanmıştır.

**Bu kurala göre birinci şekil kaçınıncı şekilde yenilenir?**

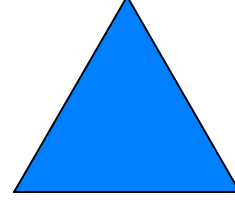
A) 8

B) 7

C) 8

D) 5


14.



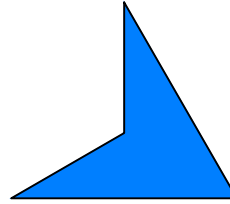
Yukarıda verilen şekili elde edebilmek için aşağıdaki şekillerden hangi ikisi birleştirilmelidir?



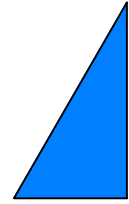
1. Şekil



2. Şekil



3. Şekil



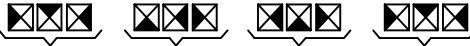
4. Şekil

A) 1 ve 2

B) 3 ve 2

C) 1 ve 3

D) 3 ve 4

15.   
(1) (2) (3) (4)

Yukarıda verilen dizi bir sıraya göre dizilmiştir. Dizilerden sırayı bozan hangisidir?

A) 1

B) 4

C) 3

D) 2