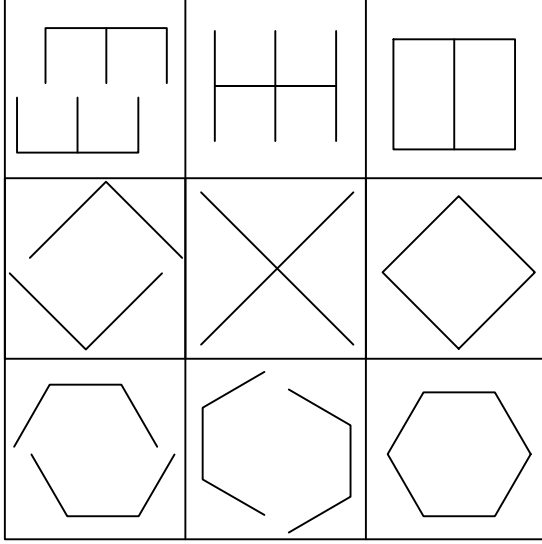




Ad : \_\_\_\_\_  
Soyad : \_\_\_\_\_  
Sınıf: \_\_\_\_\_ No: \_\_\_\_\_

## Test-11

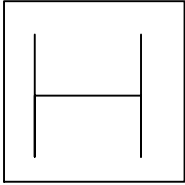
13.



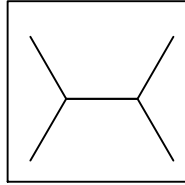
Yukarıda verilen şekiller soldan sağa belli bir kurala göre sıralanmıştır.

**Buna göre kuralı bozan şekil yerine aşağıdakilerden hangisi gelmelidir?**

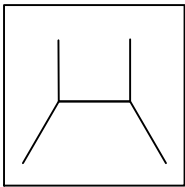
A)



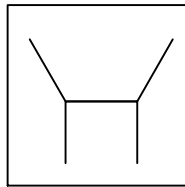
B)




C)




D)



14.



**Yukarıda verilen şekili oluşturabilmek için aşağıdaki şekillerden hangi ikisi tamamen kullanılmalıdır ?**



A) 3 ve 4

B) 1 ve 3

C) 2 ve 4

D) 1 ve 2