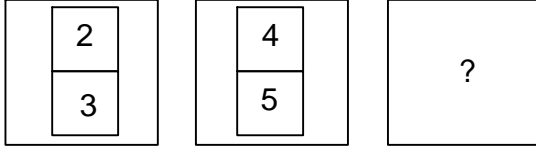




Ad : \_\_\_\_\_  
Soyad : \_\_\_\_\_  
Sınıf: \_\_\_\_\_ No: \_\_\_\_\_




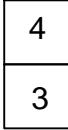
## Test-11

9.




Yukarıda verilen şekiller bir kurala göre dizi oluşturmaktadır.





**Buna göre "?" yerine hangi şekil gelmelidir?**

- A)  B) 
- C)  D) 

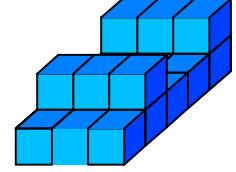
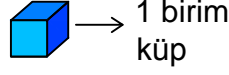
10.



Yukarıdaki şekil aşağıdaki şekillerden hangisi ile birleşirse bir daire oluşur ?

- A)  B) 
- C)  D) 

11.

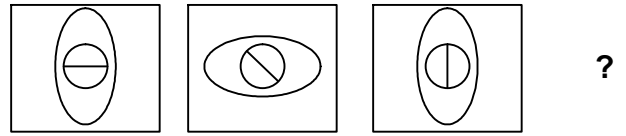


Yukarıda verilen şekil aynı büyüklükteki küp bloklardan oluşmaktadır.

**Şekilde toplam kaç küp vardı?**

- A) 18 B) 20  
C) 21 D) 24

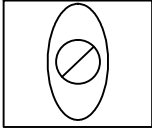
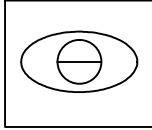
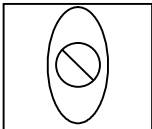
12.



1. Şekil 2. Şekil 3. Şekil 4. Şekil

Yukarıda verilen dizi bir sıraya göre dizilmiştir.

**Buna göre "?" yerine hangi şekil gelmelidir?**

- A)  B) 
- C)  D) 