





## Test-11


1.



Yukarıda verilen şekili elde edebilmek için aşağıdaki şekillerden hangi ikisi birleştirilmelidir?




1. Şekil



2. Şekil



3. Şekil



4. Şekil


A) 1 ve 2

B) 3 ve 2

C) 1 ve 3

D) 3 ve 4

2.



Yukarıda verilen şekilede kaç tane kare vardır?


A) 18

B) 20


C) 19

D) 21

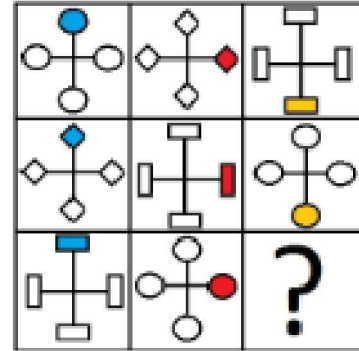
3.



Yukarıdaki resmin bir parçası çıkarılmıştır. Çıkarılan parça aşağıdakilerden hangisidir?



4.



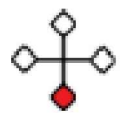
Yukarıdaki şekiller soldan sağa belli bir kurala göre dizilmiştir.

Buna göre "?" olan kutucuğa aşağıdakilerden hangisi gelmelidir ?

A)



B)



C)



D)

