







Test-10

9.




Yukarıdaki şekiller arasında ortak bir özellik vardır.





Bu ortak özellik aşağıdakilerden hangisinde mevcuttur ?

- A)  B) 
- C)  D) 

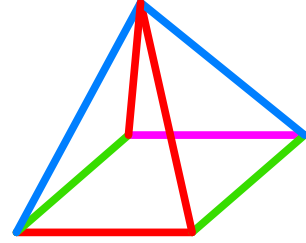
10.



Aşağıdaki şekillerden hangisi yukarıda verilen şekil ile aynıdır ?

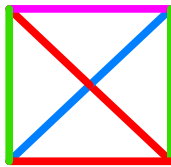
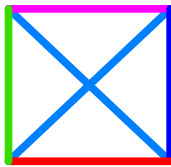


- A)  B) 
- C)  D) 

11.

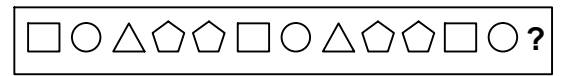


Yukarıda üç boyutlu bir geometrik cismin resmi gözükmemektedir.

Bu şeklin yukarıdan görünüşü aşağıdaki şekillerden hangisidir?

- A)  B) 
- C)  D) 

12.



Yukarıda verilen dizi bir sıraya göre dizilmiştir.

Buna göre "?" yerne hangi şekil gelmelidir?

- A)  B) 
- C)  D) 